

Ch 29. 자기장

1. A rod of mass 0.720 kg and radius 6.00 cm rests on two parallel rails (Fig. P29.15) that are $d = 12.0 \text{ cm}$ apart and $L = 45.0 \text{ cm}$ long. The rod carries a current of $I = 48.0 \text{ A}$ (in the direction shown) and rolls along the rails without slipping. A uniform magnetic field of magnitude 0.240 T is directed perpendicular to the rod and the rails. If it starts from rest, what is the speed of the rod as it leaves the rails?

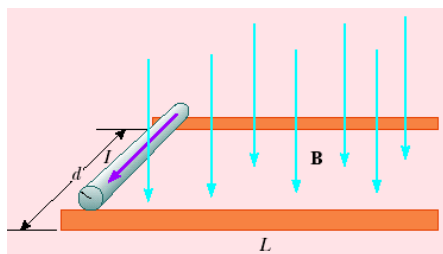


Figure P29.15

2. A nonuniform magnetic field exerts a net force on a magnetic dipole. A strong magnet is placed under a horizontal conducting ring of radius r that carries current I as shown in Figure P29.17. If the magnetic field \mathbf{B} makes an angle θ with the vertical at the ring's location, what are the magnitude and direction of the resultant force on the ring?

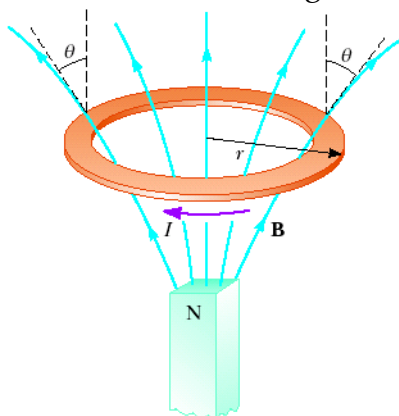


Figure P29.17

3. A rectangular coil consists of $N = 100$ closely wrapped turns and has dimensions $a = 0.400 \text{ m}$ and $b = 0.300 \text{ m}$. The coil is hinged along the y axis, and its plane makes an angle $\theta = 30.0^\circ$ with the x axis (Fig. P29.23). What is the magnitude of the torque exerted on the coil by a uniform magnetic field $B = 0.800 \text{ T}$ directed along the x axis when the current is $I = 1.20 \text{ A}$ in the direction shown? What is the expected direction of rotation of the coil?

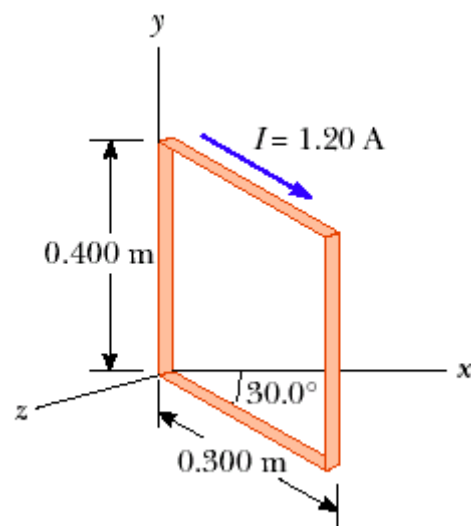


Figure P29.23

4. A flat ribbon of silver having a thickness $t = 0.200$ mm is used in a Hall-effect measurement of a uniform magnetic field perpendicular to the ribbon, as shown in Figure P29.48. The Hall coefficient for silver is $R_H = 0.840 \times 10^{-10}$ m³/C. (a) What is the density of charge carriers in silver? (b) If a current $I = 20.0$ A produces a Hall voltage $\Delta V_H = 15.0$ μ V, what is the magnitude of the applied magnetic field?

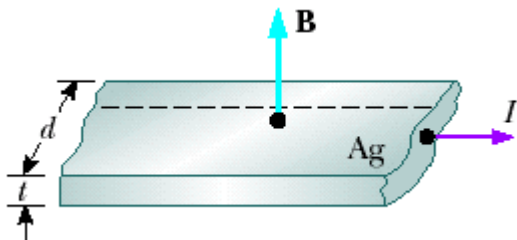


Figure P29.48

5. A uniform magnetic field of magnitude 0.150 T is directed along the positive x axis. A positron moving at 5.00×10^6 m/s enters the field along a direction that makes an angle of 85.0° with the x axis (Fig. P29.66). The motion of the particle is expected to be a helix, as described in Section 29.4. Calculate (a) the pitch p and (b) the radius r of the trajectory.

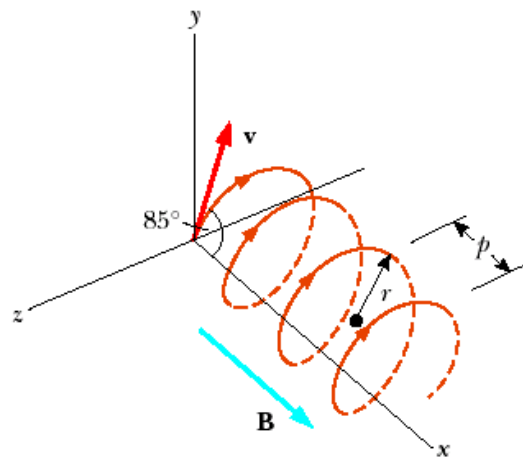


Figure P29.66

Ch. 30. 자기장의 원천

1. (a) A conductor in the shape of a square loop of edge length $\ell = 0.400$ m carries a current $I = 10.0$ A as in Fig. P30.3. Calculate the magnitude and direction of the magnetic field at the center of the square. (b) **What If?** If this conductor is formed into a single circular turn and carries the same current, what is the value of the magnetic field at the center?

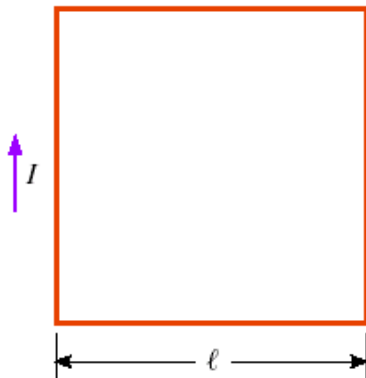


Figure P30.3

2. Consider the current-carrying loop shown in Figure P30.12, formed of radial lines and segments of circles whose centers are at point P . Find the magnitude and direction of \mathbf{B} at P .

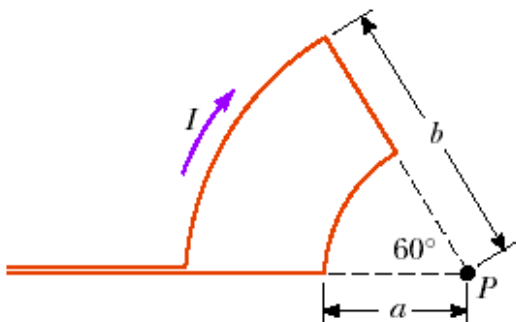


Figure P30.12

3. Figure P30.23 is a cross-sectional view of a coaxial cable. The center conductor is surrounded by a rubber layer, which is surrounded by an outer conductor, which is surrounded by another rubber layer. In a particular application, the current in the inner conductor is 1.00 A out of the page and the current in the outer conductor is 3.00 A into the page. Determine the magnitude and direction of the magnetic field at points a and b .

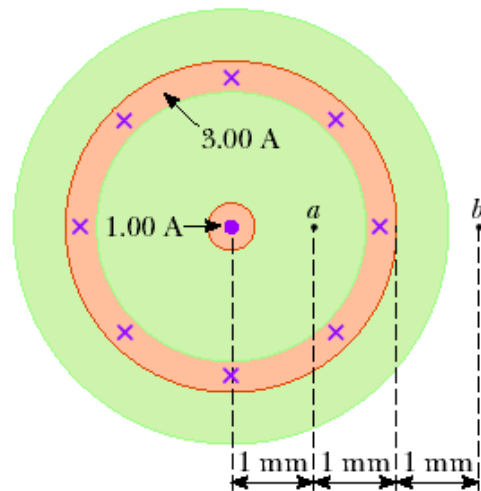


Figure P30.23

4. A solenoid 2.50 cm in diameter and 30.0 cm long has 300 turns and carries 12.0 A. (a) Calculate the flux through the surface of a disk of radius 5.00 cm that is positioned perpendicular to and centered on the axis of the solenoid, as shown in Figure P30.36a. (b) Figure P30.36b shows an enlarged end view of the same solenoid. Calculate the flux through the blue area, which is defined by an annulus that has an inner radius of 0.400 cm and outer radius of 0.800 cm.

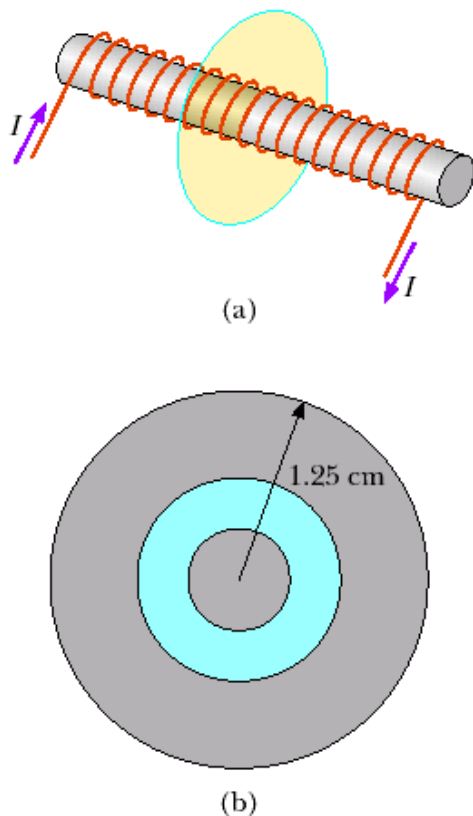


Figure P30.36

5. We have seen that a long solenoid produces a uniform magnetic field directed along the axis of a cylindrical region. However, to produce a uniform magnetic field directed parallel to a *diameter* of a cylindrical region, one can use the *saddle coils* illustrated in Figure P30.57. The loops are wrapped over a somewhat flattened tube. Assume the straight sections of wire are very long. The end view of the tube shows how the windings are applied. The overall current distribution is the superposition of two overlapping circular cylinders of uniformly distributed current, one toward you and one away from you. The current density J is the same for each cylinder. The position of the axis of one cylinder is described by a position vector \mathbf{a} relative to the other cylinder. Prove that the magnetic field inside the hollow tube is $\mu_0 J a / 2$ downward. *Suggestion:* The use of vector methods simplifies the calculation.

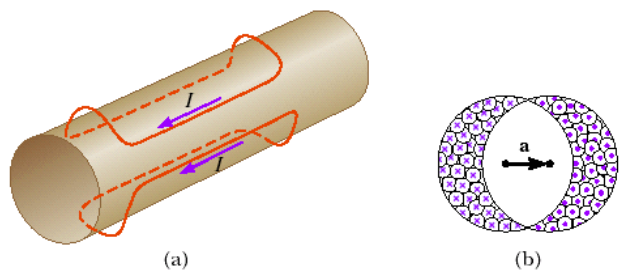


Figure P30.57: (a) General view of one turn of each saddle coil. (b) End view of the coils carrying current into the paper on the left and out of the paper on the right.

Ch. 31. Faraday's Law

1. An aluminum ring of radius 5.00 cm and resistance $3.00 \times 10^{-4} \Omega$ is placed on top of a long air-core solenoid with 1 000 turns per meter and radius 3.00 cm, as shown in Figure P31.7. Over the area of the end of the solenoid, assume that the axial component of the field produced by the solenoid is half as strong as at the center of the solenoid. Assume the solenoid produces negligible field outside its cross-sectional area. The current in the solenoid is increasing at a rate of 270 A/s. (a) What is the induced current in the ring? At the center of the ring, what are (b) the magnitude and (c) the direction of the magnetic field produced by the induced current in the ring?

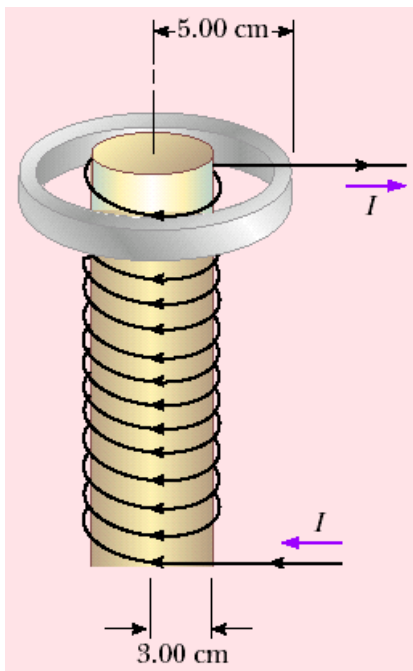


Figure P31.7

2. A long solenoid has 400 turns per meter and carries a current given by $I = (30.0 \text{ A})(1 - e^{-1.60t})$. Inside the solenoid and coaxial with it is a coil that has a radius of 6.00 cm and consists of a total of 250 turns of fine wire (Fig. P31.13). What emf is induced in the coil by the changing current?

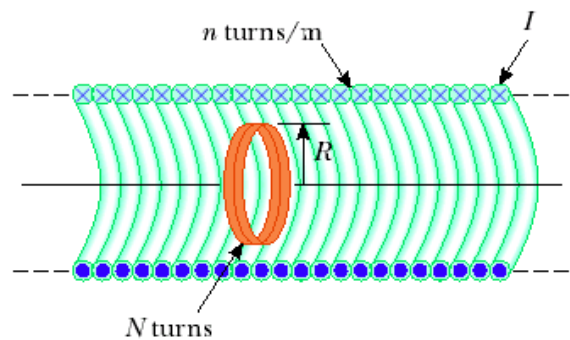


Figure P31.13

3. A rectangular coil with resistance R has N turns, each of length ℓ and width w as shown in Figure P31.29. The coil moves into a uniform magnetic field \mathbf{B} with constant velocity \mathbf{v} . What are the magnitude and direction of the total magnetic force on the coil (a) as it enters the magnetic field, (b) as it moves within the field, and (c) as it leaves the field?

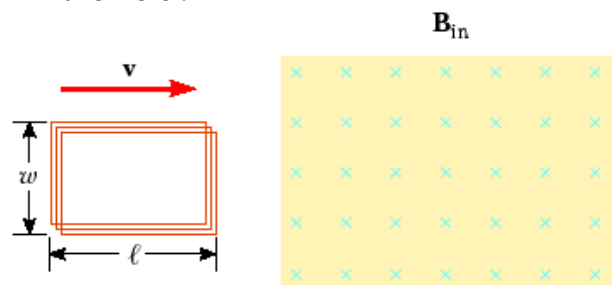


Figure P31.29

4. A conducting rectangular loop of mass M , resistance R , and dimensions w by ℓ falls from rest into a magnetic field \mathbf{B} as shown in Figure P31.43. During the time interval before the top edge of the loop reaches the field, the loop approaches a terminal speed v_T . (a) Show that

$$v_T = \frac{MgR}{B^2 w^2}$$

- (b) Why is v_T proportional to R ? (c) Why is it inversely proportional to B^2 ?

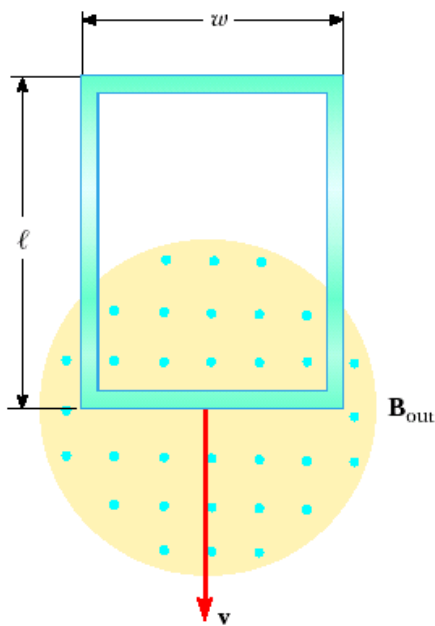


Figure P31.43

5. A conducting rod moves with a constant velocity \mathbf{v} in a direction perpendicular to a long, straight wire carrying a current I as shown in Figure P31.58. Show that the magnitude of the emf generated between the ends of the rod is

$$|\mathcal{E}| = \frac{\mu_0 v I \ell}{2\pi r}$$

In this case, note that the emf decreases with increasing r , as you might expect.

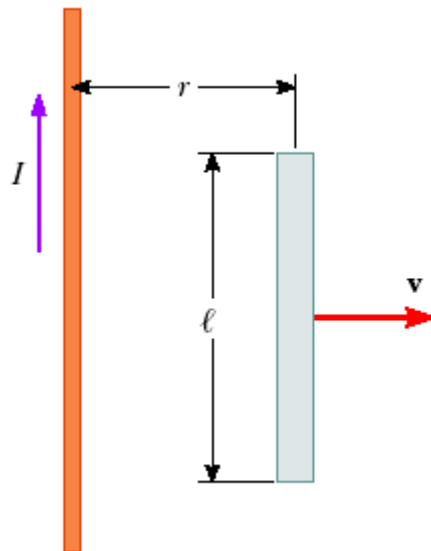


Figure P31.58